










# Maths

Nursery have been going over subtraction this week in maths, please write the following sums in their maths books and get your child to work out the answer.

Subtraction to 5	
Count and subtract.	
 3 - 1 = <input type="text"/>	
 5 - 3 = <input type="text"/>	
 4 - 2 = <input type="text"/>	
Count the fingers and subtract the number.	
 - 2 = <input type="text"/>	 - 2 = <input type="text"/>
 - 3 = <input type="text"/>	 - 2 = <input type="text"/>
 - 1 = <input type="text"/>	 - 4 = <input type="text"/>
© The Mum Educates	