

## Year 2 Homework



We would like you to try spelling these words, repeat the word four times and write them out, practise makes perfect!

Example:

Word: from

from

from

from

from

I have a cousin from Egypt.

Spelling	X1	X2	X3	X4
knock				
know				
knee				
gnat				
<b>sparse</b>				

Once you have completed these words, please practice spelling out the word of the week. Our word of the week is **sparse**.

We would like you to find out what **sparse** means and write down the definition.

After you have done this, please write out **two** different sentences using our word of the



## Measuring Centimeters

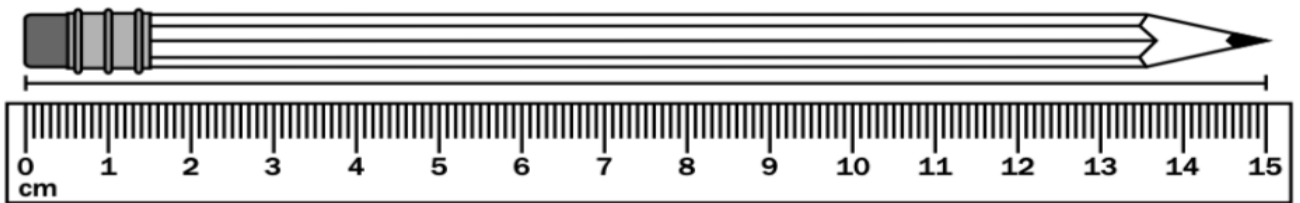
Measure each object with the ruler shown. Round to the nearest centimeter.

a.



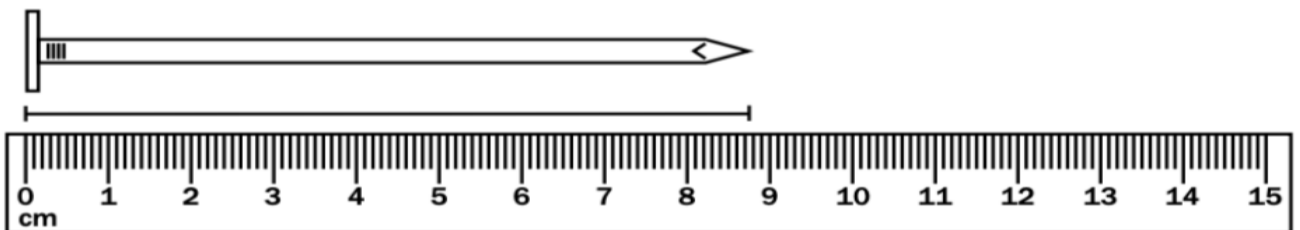
\_\_\_\_\_

b.



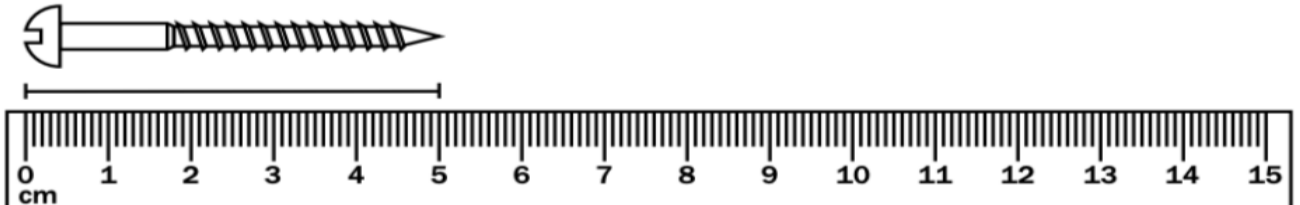
\_\_\_\_\_

c.




\_\_\_\_\_

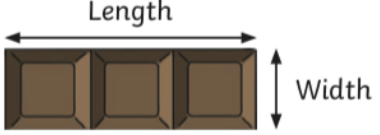
d.




# Chocolate Bar Measuring

Use a ruler to measure the length and width of each chocolate bar to the nearest centimetre (cm).

A.  Length \_\_\_\_\_ cm  
Width \_\_\_\_\_ cm



B.  Length \_\_\_\_\_ cm  
Width \_\_\_\_\_ cm

C.  Length \_\_\_\_\_ cm  
Width \_\_\_\_\_ cm

D.  Length \_\_\_\_\_ cm  
Width \_\_\_\_\_ cm

E.  Length \_\_\_\_\_ cm  
Width \_\_\_\_\_ cm

## Challenge

Tamil says that chocolate bar B is half the length of bar E. Is he correct? Explain how you know.

**PLEASE REMEMBER TO HAND IN YOUR HOMEWORK BY THE 16<sup>TH</sup>  
MARCH 2021.**