



# Reception Maths Half-Term Homework

15.02.2021-19.02.2021


Assalamu'alaykum Dear Parents/Carers,

- You may choose the activities you would like to do in your Maths Homework book.
- We would love to see your wonderful work, so do email it to Ms Ruksana or Ms Abeita.
- As well as doing some homework, we would like you to relax, have fun and enjoy your half-term😊
  
- Jazak Allah Khayr & Assalamu'alaykum.

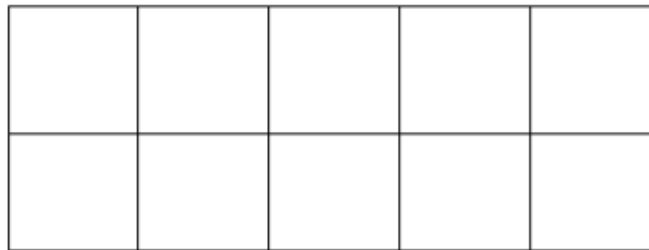



# Combining two groups

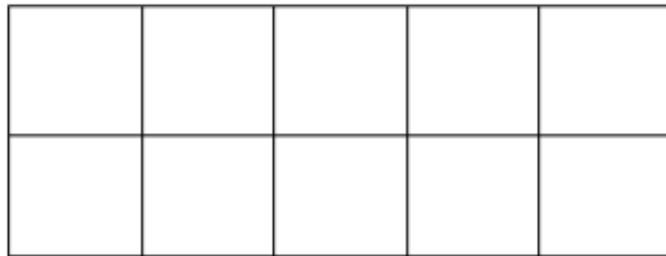


Example:



$$2 + 1 = 3$$



# Combining two groups



# Combining two groups





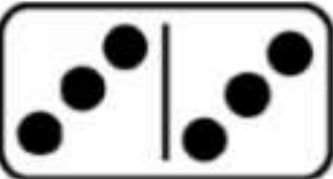
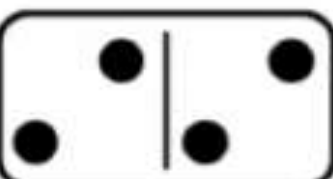


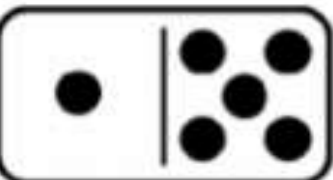



A diagram illustrating the combination of two groups. On the left, there are two stacks of blocks: a stack of 3 blue blocks and a stack of 2 red blocks. To the right is a 2x5 grid, which is empty and intended for counting the total number of blocks.

A diagram illustrating the combination of two groups. On the left, there are two stacks of blocks: a stack of 6 yellow blocks and a stack of 2 blue blocks. To the right is a 2x5 grid, which is empty and intended for counting the total number of blocks.





How many spots do the dominoes have on each side?

How many do they have altogether?

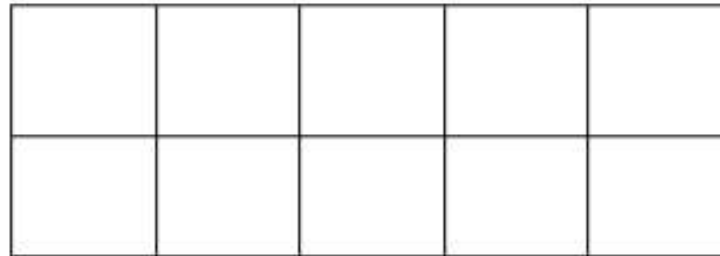

			
			
			

# Combining two groups


Example:




$$2 + 3 = 5$$




# Combining two groups







# Combining two groups


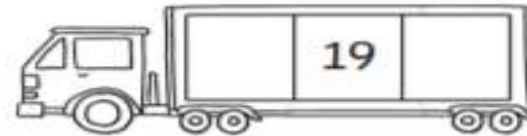
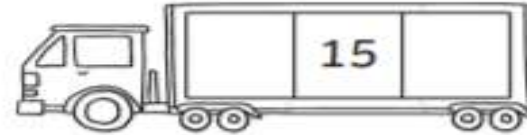
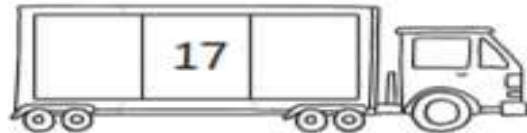
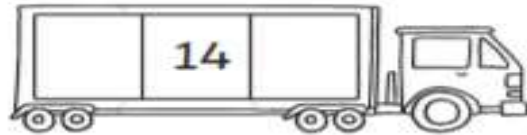
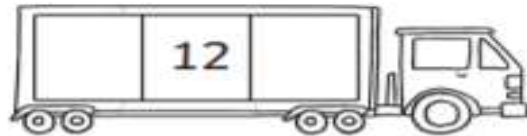
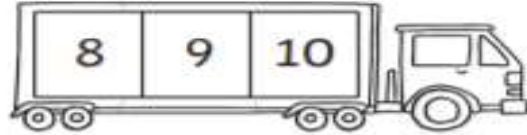



# One More, One Less

## Number Writing Sheet

Write the numbers that come before and after.



## Number 7 Washing Line Number Bonds

I need help with my washing! Help me work out the different ways I have made 7 on my washing lines.



$$4 + \square = 7$$



$$\square + 2 = 7$$



$$\square + \square = 7$$



Looking for more Numberbonds Fun? Go to [www.numberbonds.co.uk](http://www.numberbonds.co.uk)


visit [twinkl.com](http://www.twinkl.com)



© 2020 Alphablocks Ltd. All rights reserved.




$$\square + \square = \square$$



$$\square + \square = \square$$



$$\square + \square = \square$$



$$\square + \square = \square$$

Use the penguin number line to solve the problems below. Today we are thinking about taking away penguins to get less.




1 less than 10 =


1 less than 4 =

1 less than 1 =


1 less than 7 =




$$6 - 1 = 5$$



$$8 - 1 = \square$$



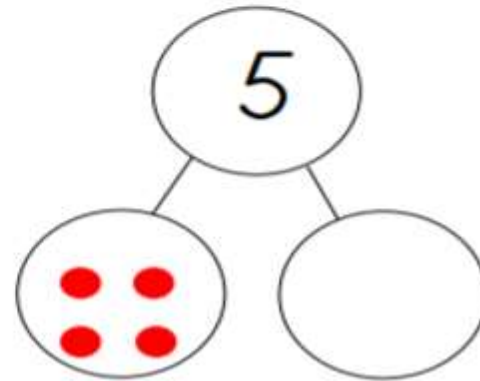
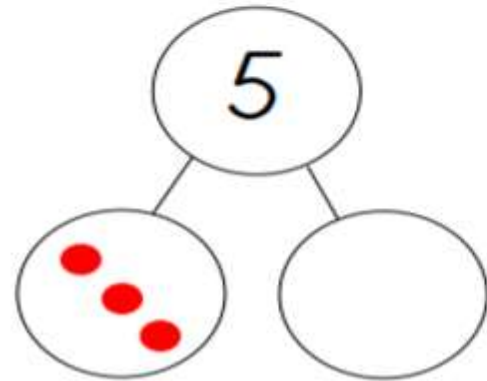
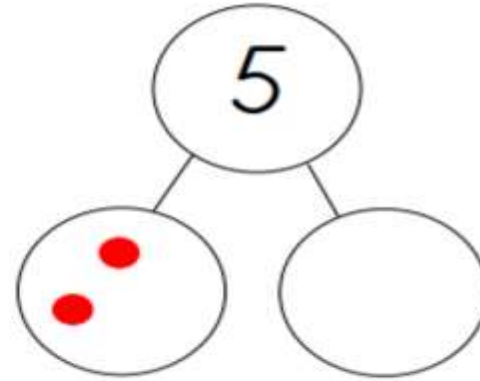
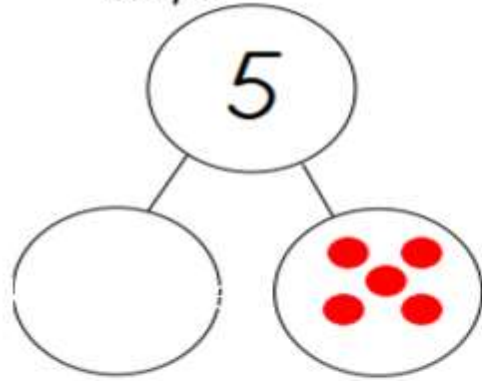
$$3 - 2 = \square$$



$$10 - 1 = \square$$

Fill in the missing dots or numbers to make 5 each time.

Example:





## Alien doubles

Draw double the number of legs on each alien. The first one has been done for you.



Draw some aliens of your own. Ask a friend to add double the number of arms to your aliens.



# Number Songs



NurseryRhymes #KidsSongs #BabySongs  
Ten Green Bottles | Nursery Rhymes | Recycle Songs

<https://youtu.be/T0ooQv7oHvw>



NurseryRhymes #KidsSongs #FolkMusic  
Once I Caught A Fish Alive | Super Simple Songs

[https://youtu.be/LNmEFt8cQ\\_U](https://youtu.be/LNmEFt8cQ_U)



Five Little Ducks #KidsSongs #FolkMusic  
Five Little Ducks | THE BEST Song for Children | LooLoo Kids

<https://youtu.be/-ccCPcujnys>

Well Done for all  
your hard work!  
Jazak Allah  
Khairan.

